

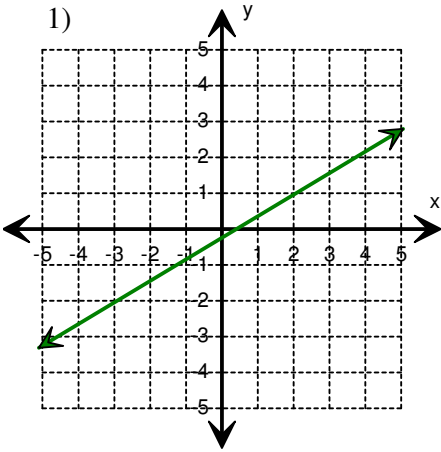
Name: _____

Score: _____

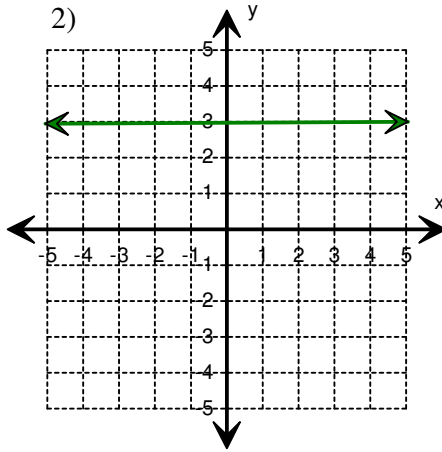
Slope Types

Write whether the slope of the line is positive, negative, zero or undefined.

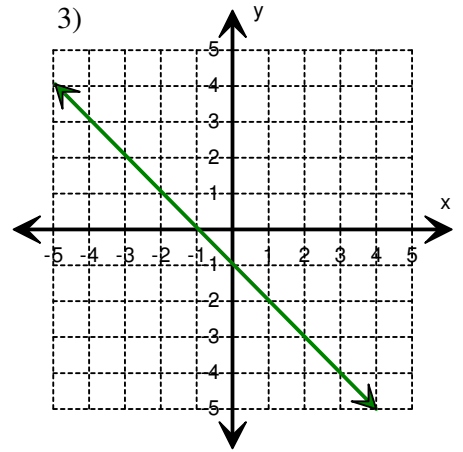
1)



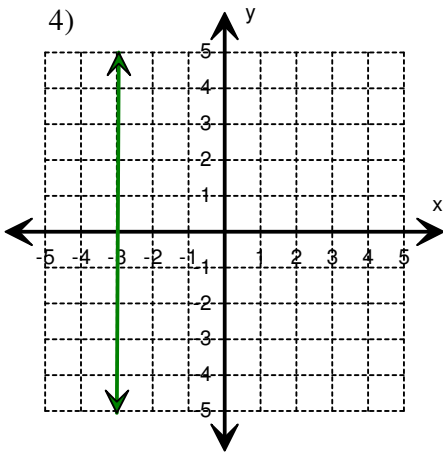
2)



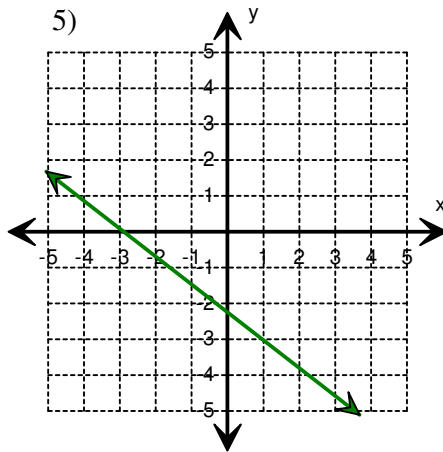
3)



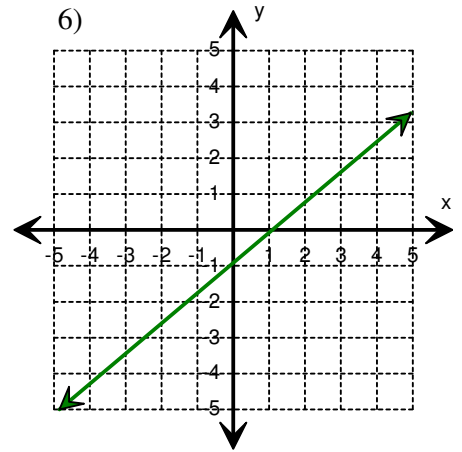
4)



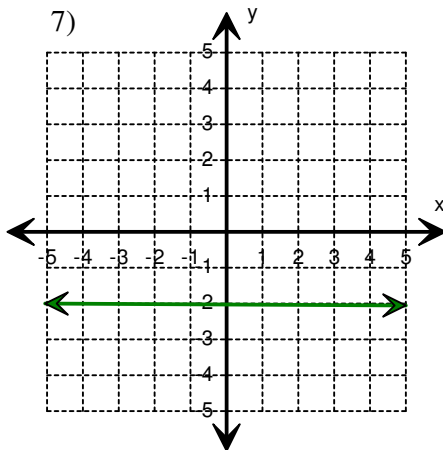
5)



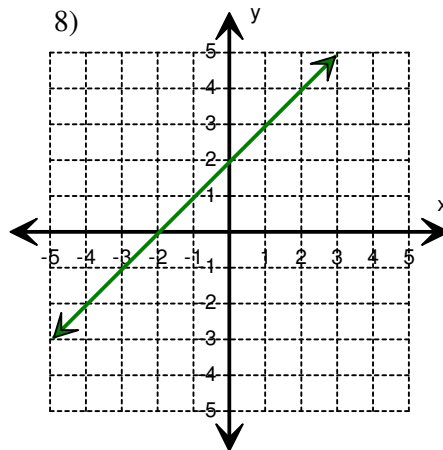
6)



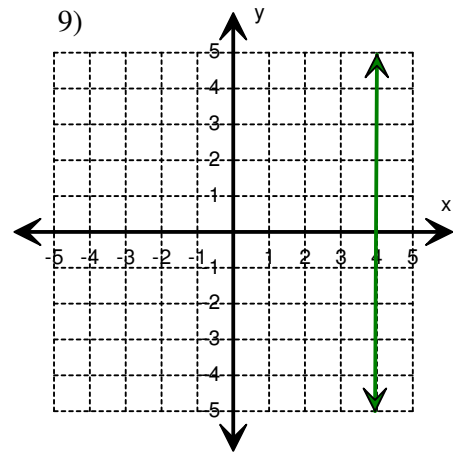
7)



8)



9)



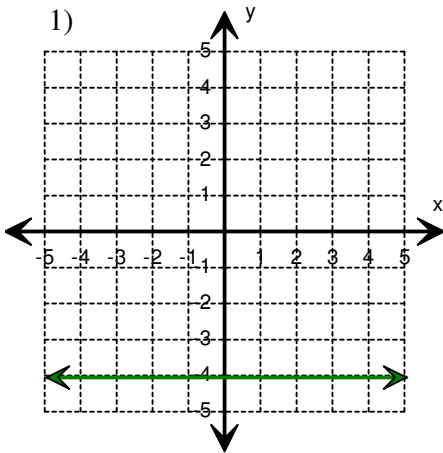
Name: _____

Score: _____

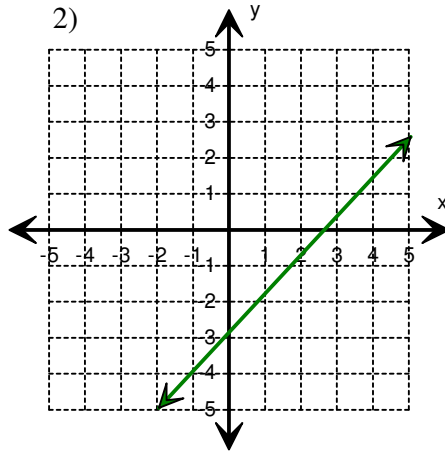
Slope Types

Write whether the slope of the line is positive, negative, zero or undefined.

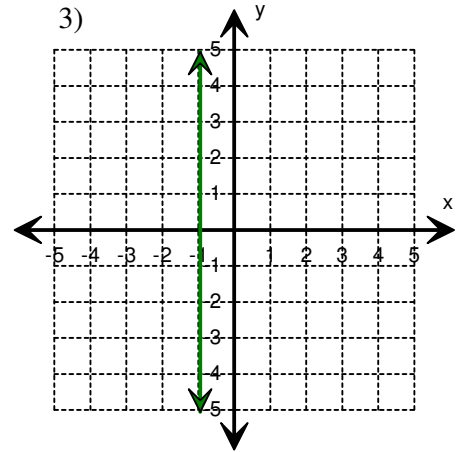
1)



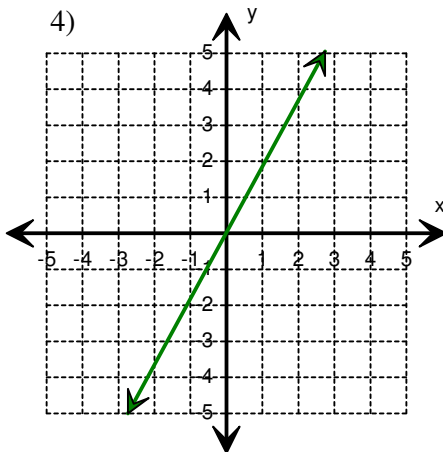
2)



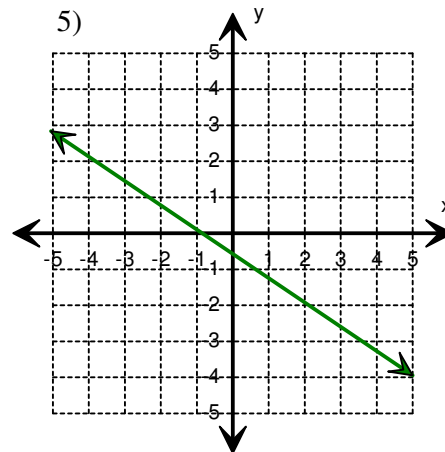
3)



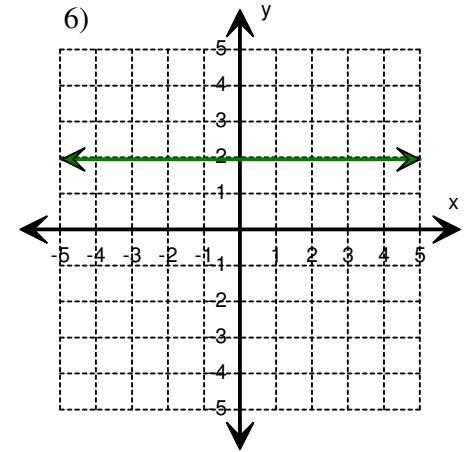
4)



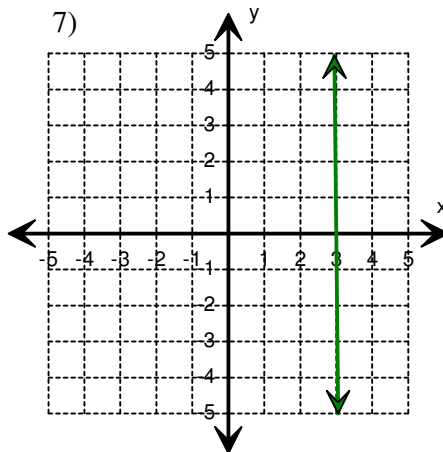
5)



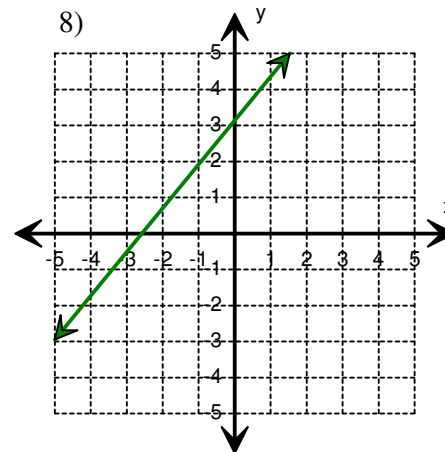
6)



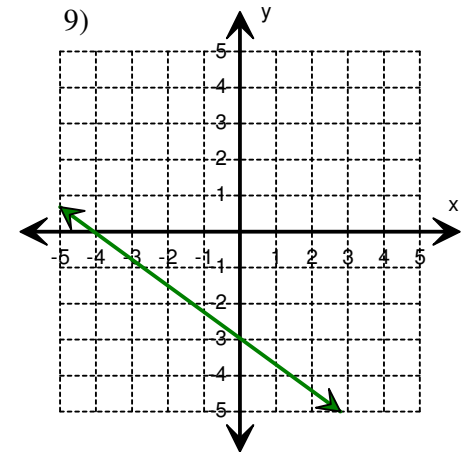
7)



8)



9)



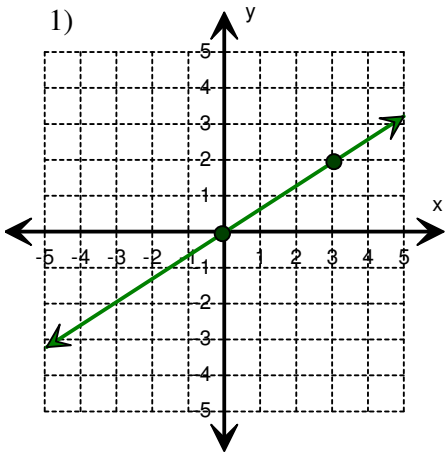
Name: _____

Score: _____

Finding the Slope

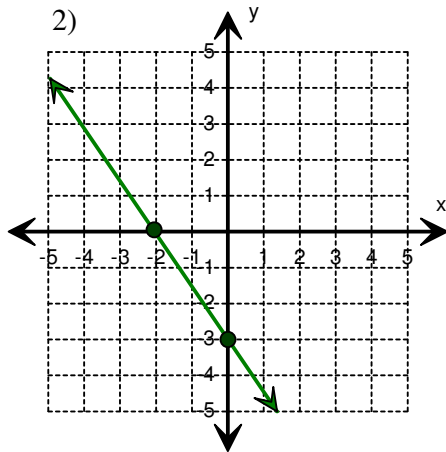
Count the rise and run; and find the slope of each line.

1)



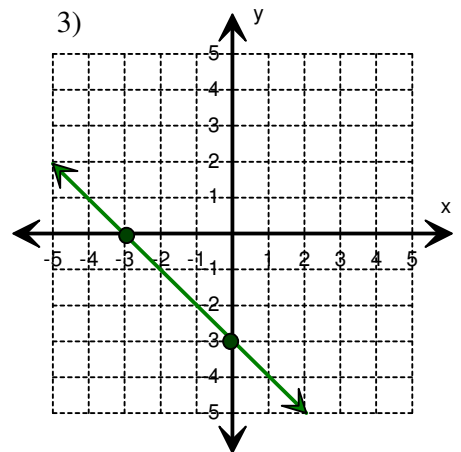
Slope = _____

2)



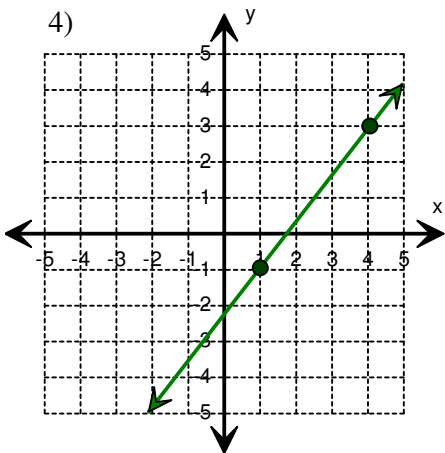
Slope = _____

3)



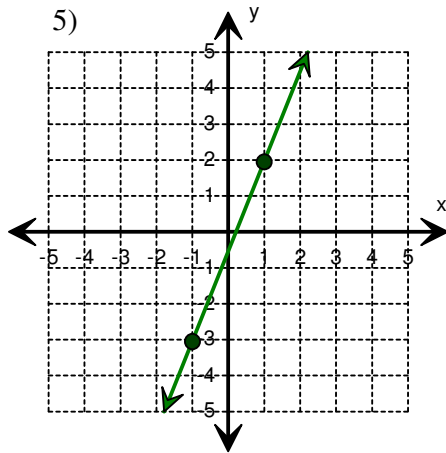
Slope = _____

4)



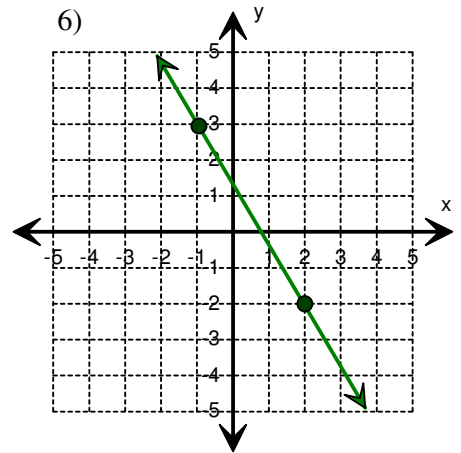
Slope = _____

5)



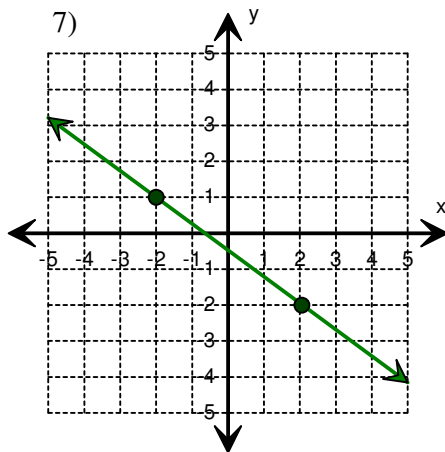
Slope = _____

6)



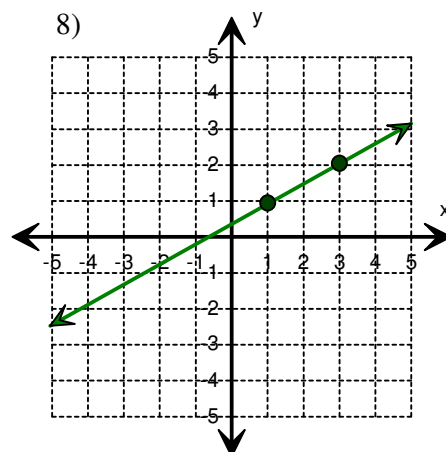
Slope = _____

7)



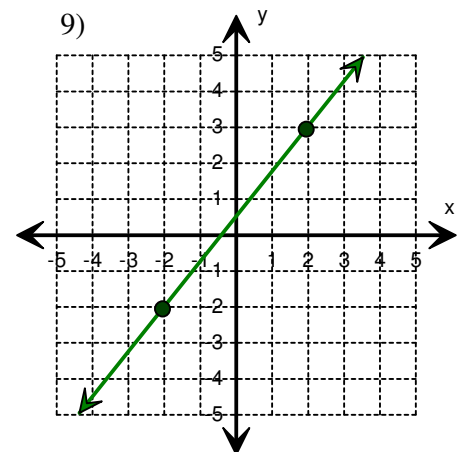
Slope = _____

8)



Slope = _____

9)



Slope = _____

Name: _____

Score: _____

Slope: Two-Point Formula

Find the slope using two-point formula.

1) $(2, -7)$ and $(-1, 6)$ Slope = <input type="text"/>	2) $(-3, 3)$ and $(7, 6)$ Slope = <input type="text"/>	3) $(-1, -9)$ and $(5, -6)$ Slope = <input type="text"/>
4) $(-4, 9)$ and $(-5, 8)$ Slope = <input type="text"/>	5) $(8, -3)$ and $(-7, -1)$ Slope = <input type="text"/>	6) $(-5, 3)$ and $(2, 6)$ Slope = <input type="text"/>
7) $(8, 5)$ and $(-9, 5)$ Slope = <input type="text"/>	8) $(-7, 2)$ and $(5, 1)$ Slope = <input type="text"/>	9) $(-4, 3)$ and $(-4, -7)$ Slope = <input type="text"/>
10) $(-6, 1)$ and $(3, 5)$ Slope = <input type="text"/>	11) $(1, -9)$ and $(1, -6)$ Slope = <input type="text"/>	12) $(-8, -3)$ and $(-4, 2)$ Slope = <input type="text"/>
13) $(2, 3)$ and $(7, -6)$ Slope = <input type="text"/>	14) $(1, -8)$ and $(5, 3)$ Slope = <input type="text"/>	15) $(3, -9)$ and $(-4, -9)$ Slope = <input type="text"/>

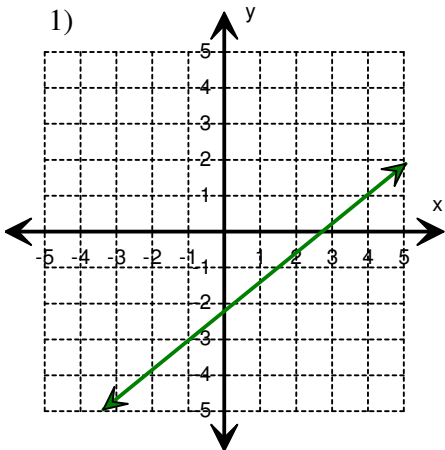
Name: _____

Score: _____

Slope of the Line

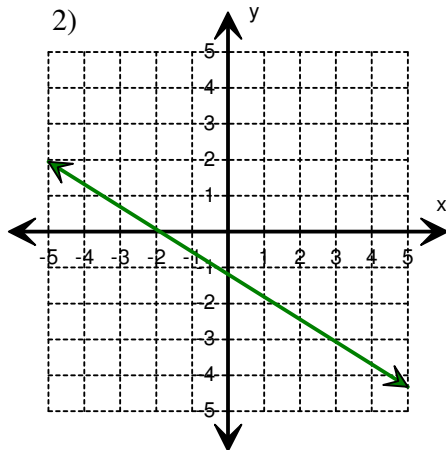
Count the rise and run between any two coordinates; and find the slope of each line.

1)



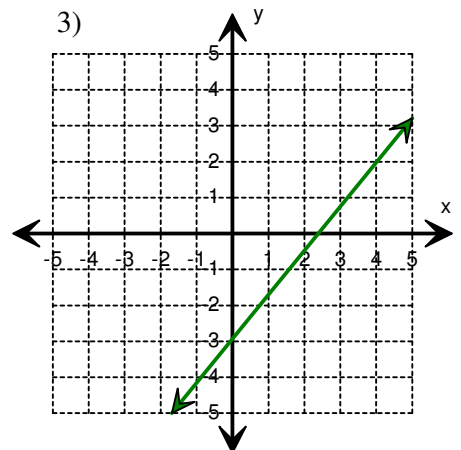
Slope = _____

2)



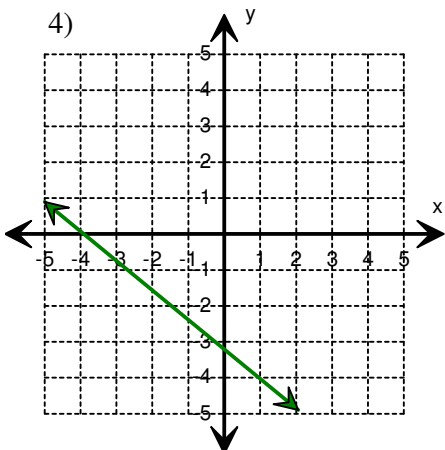
Slope = _____

3)



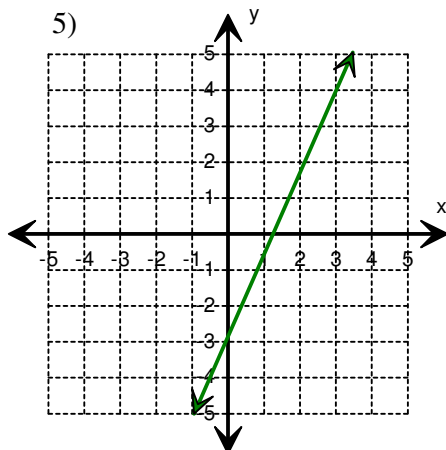
Slope = _____

4)



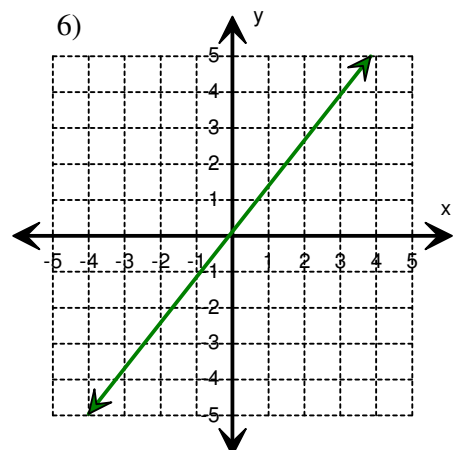
Slope = _____

5)



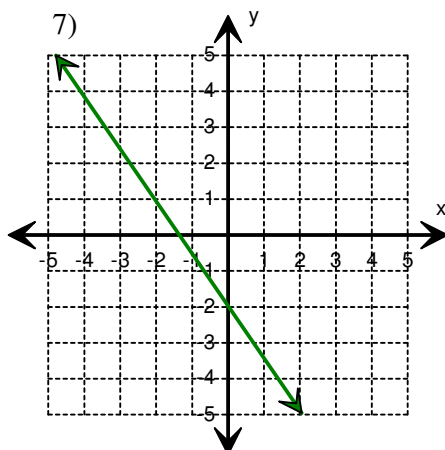
Slope = _____

6)



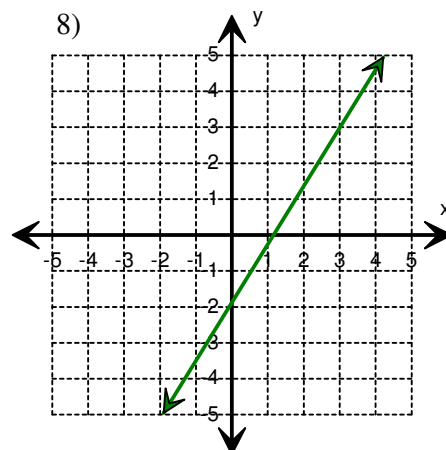
Slope = _____

7)



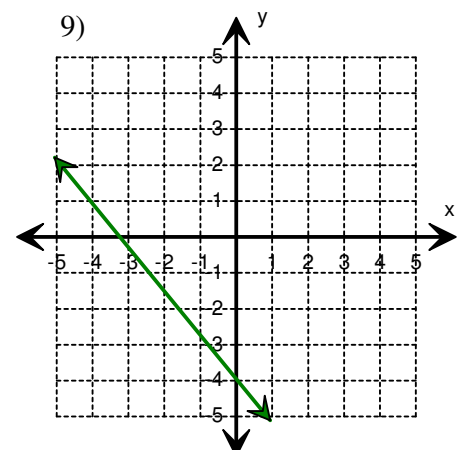
Slope = _____

8)



Slope = _____

9)



Slope = _____

Name: _____

Score: _____

Slope

Find the slope of each linear equation.

1) $y = \frac{3}{2}x + 5$ Slope = <input type="text"/>	2) $y = -7x + 1$ Slope = <input type="text"/>	3) $y = \frac{1}{3}x - 5$ Slope = <input type="text"/>
4) $y = 5x + 2$ Slope = <input type="text"/>	5) $y = 4x - \frac{1}{3}$ Slope = <input type="text"/>	6) $y = -\frac{5}{3}x + 7$ Slope = <input type="text"/>
7) $y = \frac{7}{2}x - \frac{1}{5}$ Slope = <input type="text"/>	8) $y = 10x + 2$ Slope = <input type="text"/>	9) $y = -\frac{9}{2}x + \frac{1}{2}$ Slope = <input type="text"/>
10) $y = -8x + 3$ Slope = <input type="text"/>	11) $y = \frac{2}{5}x + 1$ Slope = <input type="text"/>	12) $y = 6x + 4$ Slope = <input type="text"/>
13) $y = \frac{9}{4}x + \frac{2}{3}$ Slope = <input type="text"/>	14) $y = -x + 8$ Slope = <input type="text"/>	15) $y = -\frac{5}{2}x + \frac{1}{4}$ Slope = <input type="text"/>
16) $y = 11x + 3$ Slope = <input type="text"/>	17) $y = -\frac{8}{3}x + 9$ Slope = <input type="text"/>	18) $y = \frac{7}{4}x - 7$ Slope = <input type="text"/>
19) $y = -\frac{1}{8}x + 13$ Slope = <input type="text"/>	20) $y = \frac{2}{7}x - 6$ Slope = <input type="text"/>	21) $y = 3x + \frac{1}{4}$ Slope = <input type="text"/>